

PRINT Your Name: _____ Recitation Time _____

There are 10 problems on 4 pages. Each problem is worth 10 points. In one problem you are instructed to use the definition of the derivative; you MUST use the definition of the derivative in that problem. In the other problems you may use any legitimate derivative rule. SHOW your work. **CIRCLE** your answer. NO CALCULATORS!

1. The volume of a cube is growing at the rate of 6 cubic inches per second. Find the rate of change of the cube's surface area at the instant when each side has length 10 inches.

$$V = s^3$$

$$A = 6s^2$$

we know $\frac{dV}{dt} = 6$

We want $\frac{dA}{dt} \Big|_{s=10}$

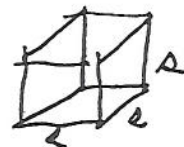
$$\frac{dA}{dt} = 12s \frac{ds}{dt}$$

$$\frac{dA}{dt} = 12s \frac{dV}{3s^2 dt} = 4 \frac{dV}{s dt}$$

$$\frac{dV}{dt} = 3s^2 \frac{ds}{dt}$$

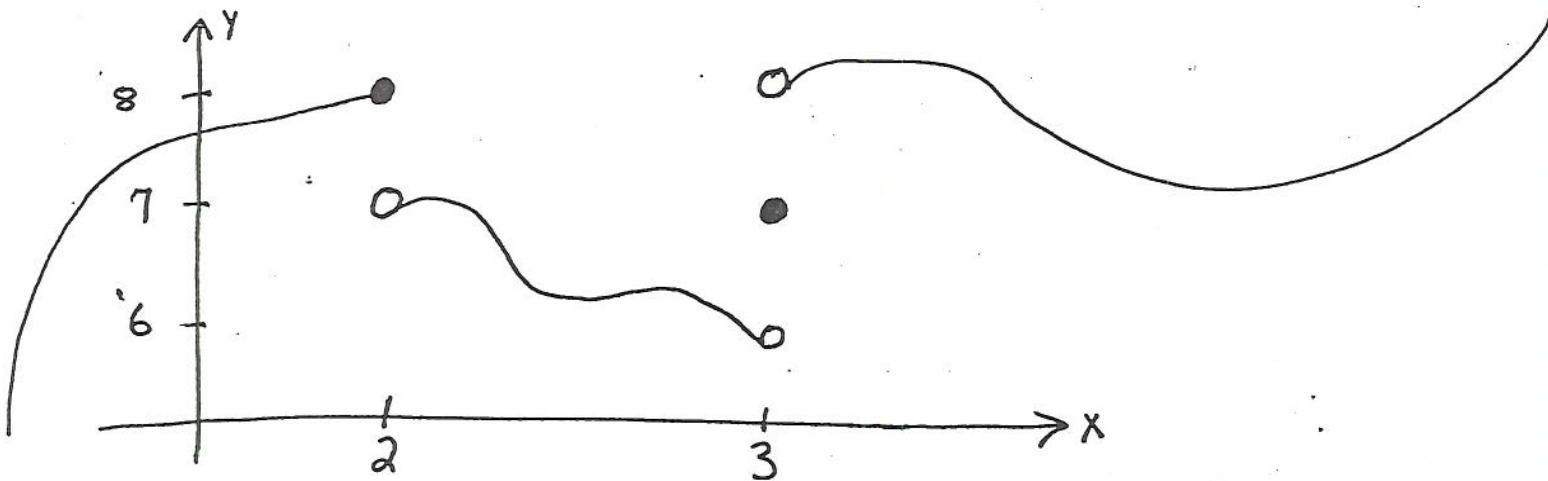
$$\frac{dA}{dt} \Big|_{s=10} = \frac{4 \cdot 6}{10} = 2.4 \frac{\text{in}^2}{\text{sec.}}$$

$$\frac{\frac{dV}{dt}}{3s^2} = \frac{ds}{dt}$$



There are 6 faces. Each face has area s^2 .

2. (The penalty for each mistake is five points.) The picture represents the graph of $y = f(x)$.

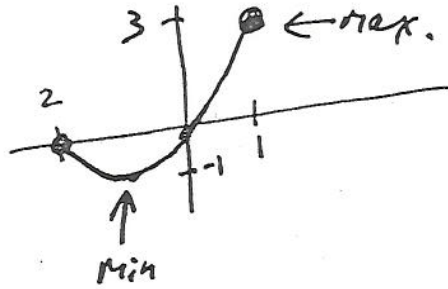


Fill in the blanks:

$f(2) = \underline{8}$	$\lim_{x \rightarrow 2^+} f(x) = \underline{7}$	$\lim_{x \rightarrow 2^-} f(x) = \underline{8}$	$\lim_{x \rightarrow 2} f(x) = \underline{DNE}$
$f(3) = \underline{7}$	$\lim_{x \rightarrow 3^+} f(x) = \underline{8}$	$\lim_{x \rightarrow 3^-} f(x) = \underline{6}$	$\lim_{x \rightarrow 3} f(x) = \underline{DNE}$

3. Find the maximum and the minimum of $f(x) = x^2 + 2x$ for $-2 \leq x \leq 1$.

$$\begin{aligned} f' &= 2x + 2 \\ f' &= 0 \text{ when } x = -1 \\ f(-1) &= 1 - 2 = -1 \\ f(-2) &= 4 - 4 = 0 \\ f(1) &= 1 + 2 = 3 \end{aligned}$$



The minimum is $(-1, -1)$
The maximum is $(1, 3)$

4. Use the DEFINITION of the DERIVATIVE to find the derivative of

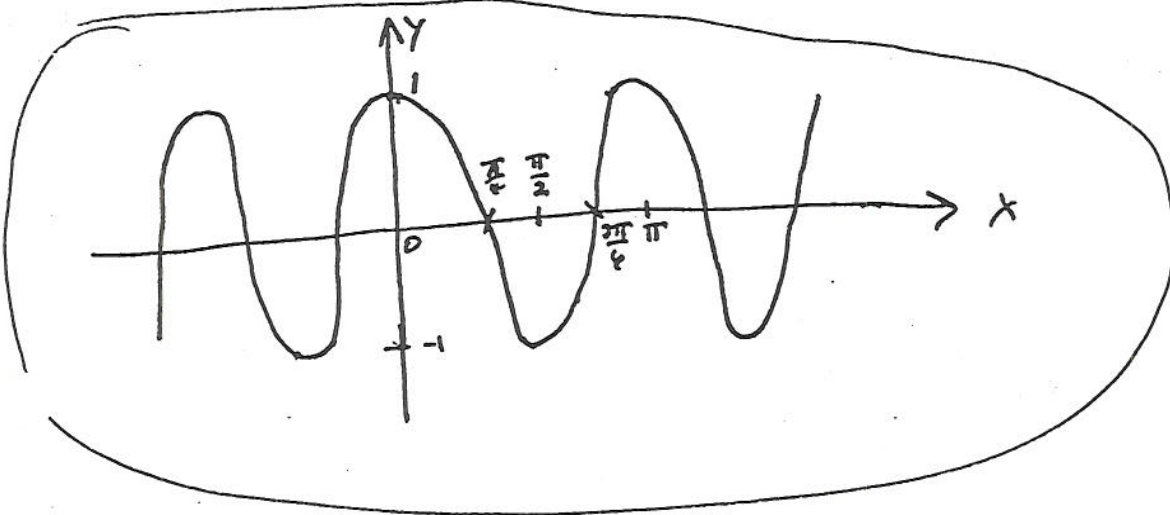
$$f(x) = \frac{1}{4x-3}$$

$$f'(x) = \lim_{h \rightarrow 0} \frac{f(x+h) - f(x)}{h} = \lim_{h \rightarrow 0} \frac{\frac{1}{4(x+h)-3} - \frac{1}{4x-3}}{h} = \lim_{h \rightarrow 0} \frac{(4x-3) - (4(x+h)-3)}{(4(x+h)-3)(4x-3)h}$$

$$= \lim_{h \rightarrow 0} \frac{\cancel{4x-3} - (\cancel{4x+4h-3})}{(4(x+h)-3)(4x-3)h} = \lim_{h \rightarrow 0} \frac{-4h}{(4(x+h)-3)(4x-3)h}$$

$$= \lim_{h \rightarrow 0} \frac{-4}{(4(x+h)-3)(4x-3)} = \frac{-4}{(4x-3)(4x-3)} = \frac{-4}{(4x-3)^2}$$

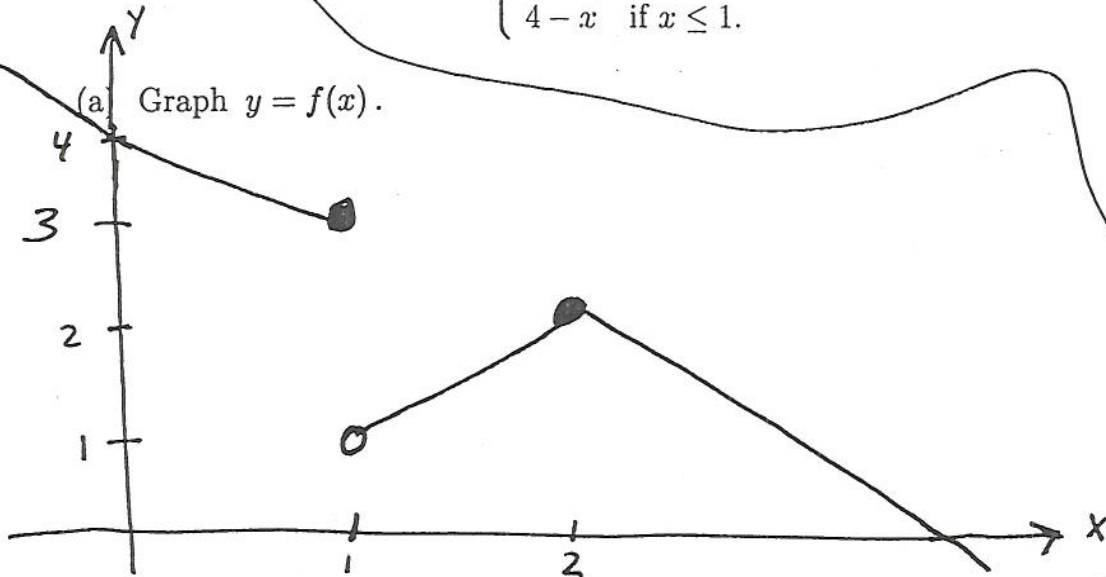
5. Graph $y = \cos 2x$. Mark a few points on each axis.



6. (The penalty for each mistake is five points.) Let

$$f(x) = \begin{cases} 4-x & \text{if } 2 \leq x, \\ x & \text{if } 1 < x < 2, \text{ and} \\ 4-x & \text{if } x \leq 1. \end{cases}$$

(a) Graph $y = f(x)$.



(b) Fill in the blanks:

$f(0) = 4$	$\lim_{x \rightarrow 0^+} f(x) = 4$	$\lim_{x \rightarrow 0^-} f(x) = 4$	$\lim_{x \rightarrow 0} f(x) = 4$
$f(1) = 3$	$\lim_{x \rightarrow 1^+} f(x) = 1$	$\lim_{x \rightarrow 1^-} f(x) = 3$	$\lim_{x \rightarrow 1} f(x) = \text{DNE}$
$f(2) = 2$	$\lim_{x \rightarrow 2^+} f(x) = 2$	$\lim_{x \rightarrow 2^-} f(x) = 2$	$\lim_{x \rightarrow 2} f(x) = 2$

(c) Where is $f(x)$ continuous?

$f(x)$ is continuous for all x except $x=1$

(d) Where is $f(x)$ differentiable?

$f(x)$ is differentiable for all x except $x=1$ and $x=2$

7. Let $2x^3y^2 = \sin(2x^2y^4)$. Find $\frac{dy}{dx}$.

$$2x^3 \cdot 2y \frac{dy}{dx} + 6x^2y^2 = \cos(2x^2y^4) [8x^2y^3 \frac{dy}{dx} + 4xy^4]$$

$$\frac{dy}{dx} (4x^3y - 8x^2y^3 \cos(2x^2y^4)) = 4xy^4 \cos(2x^2y^4) - 6x^2y^2$$

$$\frac{dy}{dx} = \frac{4xy^4 \cos(2x^2y^4) - 6x^2y^2}{4x^3y - 8x^2y^3 \cos(2x^2y^4)}$$

4

8. Find the equation of the line tangent to $f(x) = \sin^2 x$ at $x = \frac{\pi}{4}$.

$$f\left(\frac{\pi}{4}\right) = \left[\sin\left(\frac{\pi}{4}\right)\right]^2 = \left(\frac{\sqrt{2}}{2}\right)^2 = \frac{2}{4} = \frac{1}{2}$$

$$f'(x) = 2 \sin x \cos x$$

$$f'\left(\frac{\pi}{4}\right) = 2 \frac{\sqrt{2}}{2} \frac{\sqrt{2}}{2} = \frac{2 \cdot 2}{2 \cdot 2} = 1$$

$$y - y_1 = m(x - x_1)$$

$$(y - \frac{1}{2}) = 1(x - \frac{\pi}{4})$$

9. Let $y = \frac{x}{\sin x}$. Find dy .

$$dy = \frac{\sin x - x \cos x}{\sin^2 x} dx$$

(because $dy = \frac{dy}{dx} dx$)10. Let $y = \sqrt{x^3 \cos^2(2x) + 19x^2}$. Find $\frac{dy}{dx}$.

$$\frac{dy}{dx} = \frac{3x^2 + x^3 2 \cos(2x) (-\sin(2x)) 2 + 38x^2 \cos^2(2x)}{2 \sqrt{x^3 \cos^2(2x) + 19x^2}}$$