

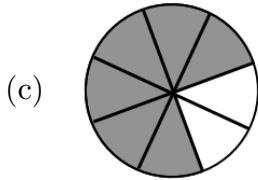
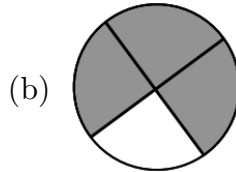
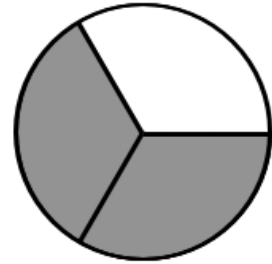
Name _____

MATH 221: BASIC CONCEPTS OF ELEMENTARY MATHEMATICS I

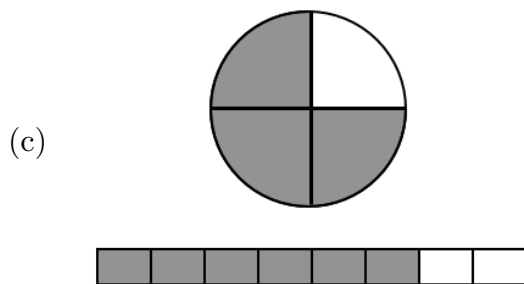
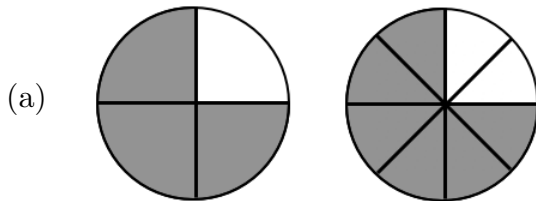
Quiz #13

Points: Each problem is worth 4 points.

1. Which picture below represents a fraction equivalent to the fraction represented by the picture to the right?



2. Which one of the following is the least useful in explaining to a child why the fractions $\frac{3}{4}$ and $\frac{6}{8}$ are equal?



(d)
$$\frac{3}{4} \times \frac{2}{2} = \frac{6}{8}$$